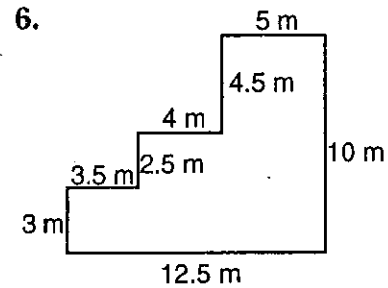
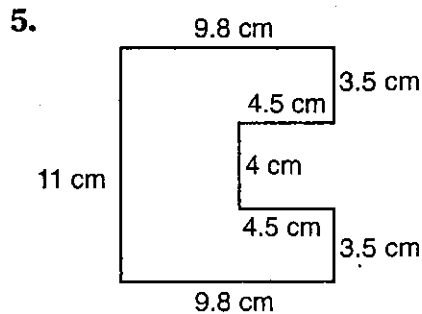
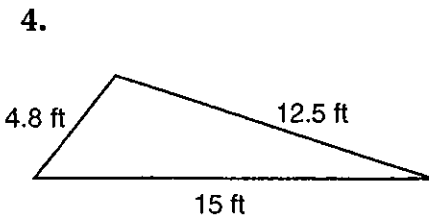
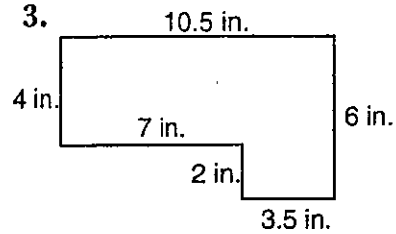
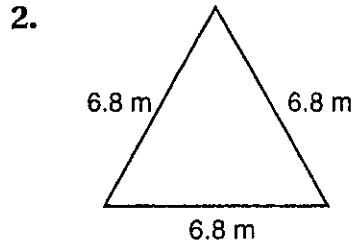
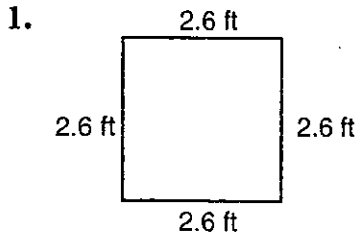


EXTRA PRACTICE **2-3****LINEAR MEASURE AND PERIMETER****EXERCISES**

Find the perimeter of each figure with its given dimensions.



7. square: 15 mm _____

8. rectangle: 4 in., 6 in. _____

9. triangle: 12 cm, 15 cm, 18 cm _____

10. rectangle: 5.7 cm, 6.5 cm _____

11. square: 5.8 cm _____

12. triangle: 4.5 in., 5.6 in., 3.8 in. _____

13. rectangle: 4.5 ft, 3.75 ft _____

14. square: 2.25 in. _____

Estimate the perimeter of the following objects.

15. square picture: 6.5 in. _____

16. window: 5.8 ft by 8.4 ft _____

17. patio: 3.8 m by 4.9 m _____

18. door: 8.5 ft by 4.8 ft _____

19. A builder needs to order trim to put around a window. The dimensions of the window are 4 ft by 8 ft. How many feet of trim should he order? _____