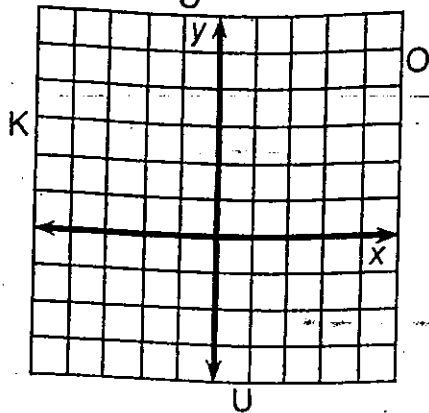


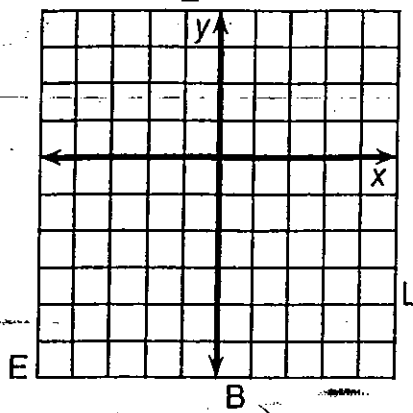
Whom Should You See at the Bank If You Need To Borrow Money?

Use the slope and y -intercept to graph each equation below. The graph, if extended, will cross a letter. Print this letter in each box that contains the number of that exercise.

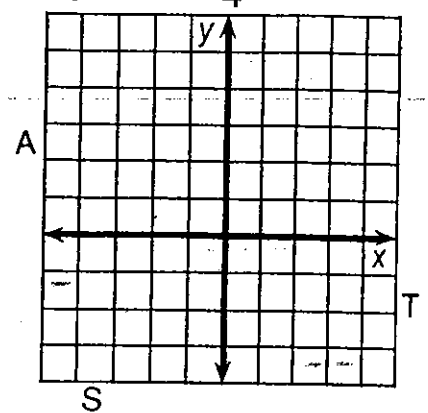
① $y = \frac{2}{3}x + 1$



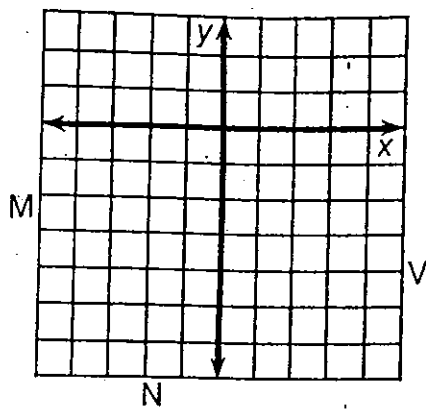
② $y = \frac{1}{2}x - 3$



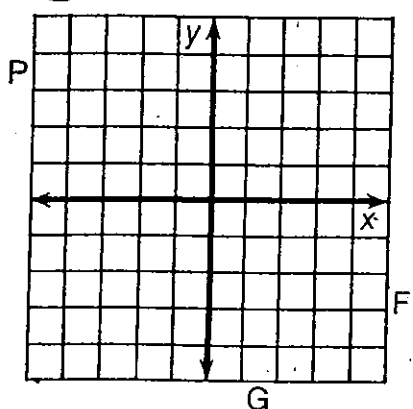
③ $y = -\frac{3}{4}x + 2$



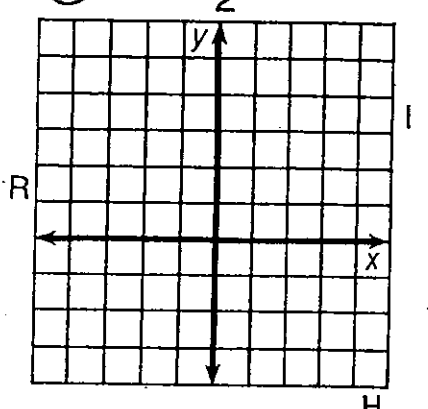
④ $y = 2x - 4$



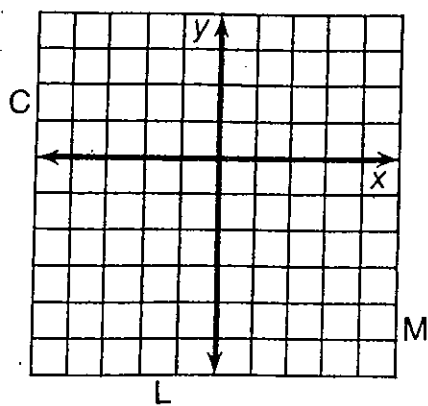
⑤ $y = -3x - 1$



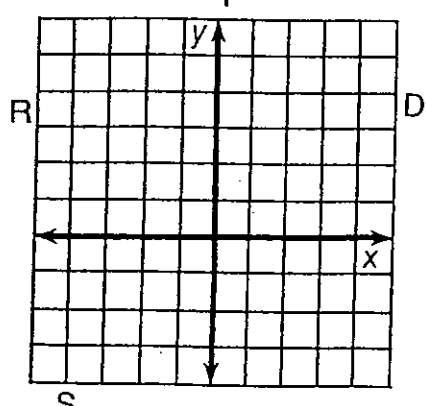
⑥ $y = -\frac{3}{2}x + 3$



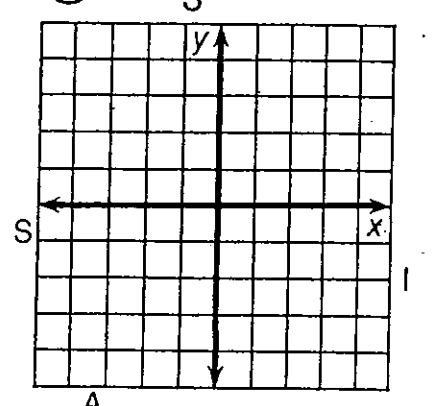
⑦ $y = 4x - 2$



⑧ $y = -\frac{1}{4}x + 2$



⑨ $y = \frac{5}{3}x$

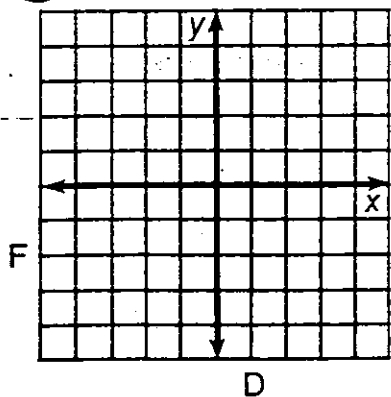


3	6	2	7	1	9	4	9	8	8	9	4	5	2	8
---	---	---	---	---	---	---	---	---	---	---	---	---	---	---

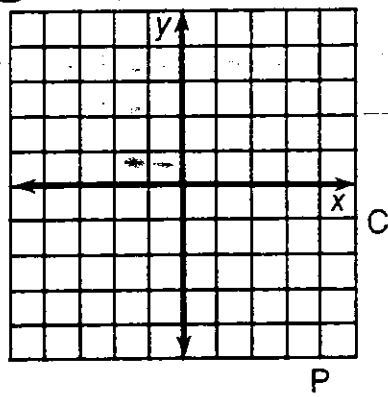
Why Did the Cow Want a Divorce?

Graph each equation below. The graph, if extended, will cross a letter. Look for this letter in the string of letters near the bottom of the page and CROSS IT OUT each time it appears. When you finish, write the remaining letters in the rectangle at the bottom of the page.

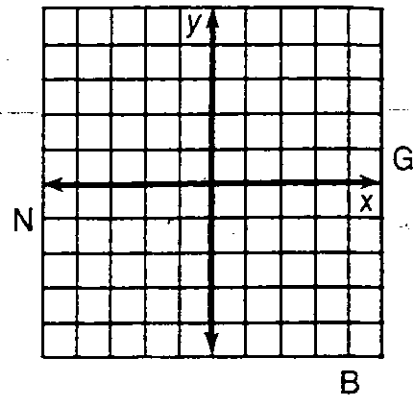
① $y = -2$



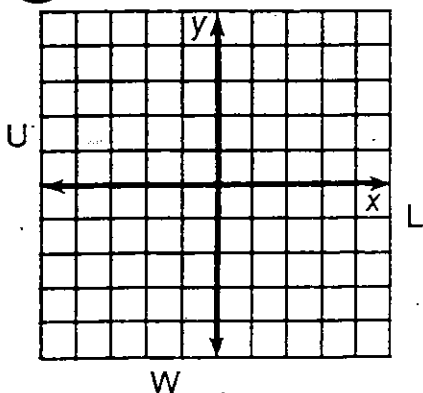
② $x = 4$



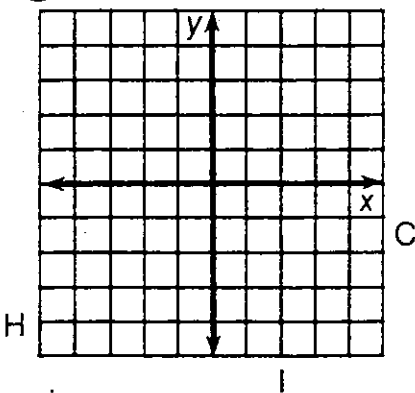
③ $2x - 3y = 9$



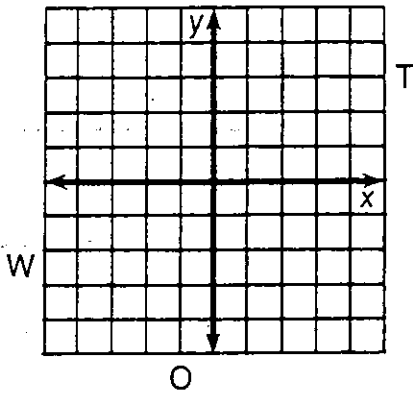
④ $x + 2y - 4 = 0$



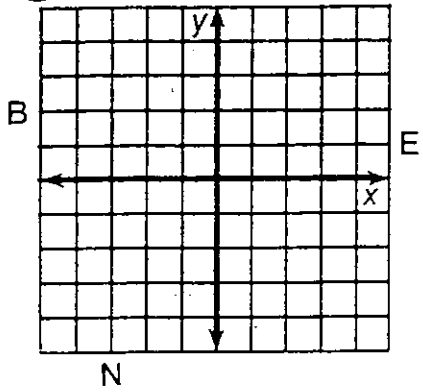
⑤ $3x + 4y = 12$



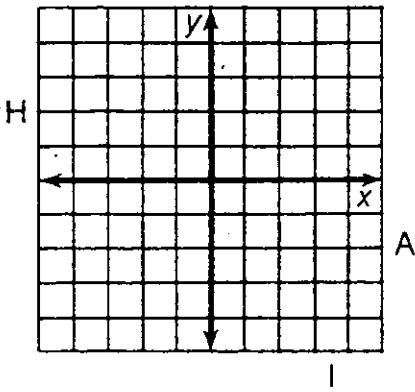
⑥ $6x - 5y + 20 = 0$



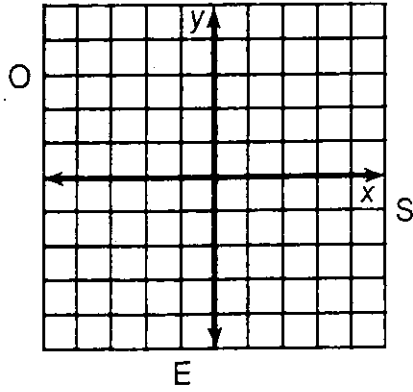
⑦ $x + 3 = 0$



⑧ $2x - 7 = 0$



⑨ $-2x = 2y + 5$



CSIHOWEHOFANDAPLBOIUFLGMSIPTOWEIERN

Answer: _____